

SOLUTIONS

1) Right hand derivative of $f(x)$ at $x=1$, $f(1) = 0^2 + \sin 0 = 0$

$$\begin{aligned} \lim_{h \rightarrow 0^+} \frac{f(1+h) - f(1)}{h} &= \lim_{h \rightarrow 0^+} \frac{|1+h-1|(1+h)^2 + \sin(1+h-1) - 0}{h} \\ &= \lim_{h \rightarrow 0^+} \frac{h(1+h)^2 + \sin h}{h} = \lim_{h \rightarrow 0^+} (1+h)^2 + \frac{\sin h}{h} = 2 // \end{aligned}$$

Left hand derivative of $f(x)$ at $x=1$,

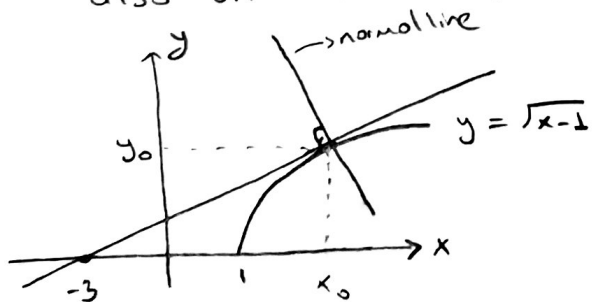
$$\begin{aligned} \lim_{h \rightarrow 0^-} \frac{f(1+h) - f(1)}{h} &= \lim_{h \rightarrow 0^-} \frac{|1+h-1|(1+h)^2 + \sin(1+h-1) - 0}{h} \\ &= \lim_{h \rightarrow 0^-} \frac{-h(1+h)^2 + \sin h}{h} = \lim_{h \rightarrow 0^-} -(1+h)^2 + \frac{\sin h}{h} = 0 // \end{aligned}$$

Since right and left derivative of $f(x)$ at $x=1$ does not equal, f is not differentiable at $x=1$, $f'(1)$ does not exist.

2) Suppose that the point $P(x_0, y_0)$ where the tangent line to the

curve $y = \sqrt{x-1}$ crosses the x-axis at $x = -3$. $P(x_0, y_0)$ is

also on the curve, that is $y_0 = \sqrt{x_0 - 1}$.



* We have to find the slope of tangent line (m_T)

* We have to find the equation of tangent line

* We have to find (x_0, y_0)

$$m_T = \left. \frac{df}{dx} \right|_{x=x_0} = \frac{1}{2\sqrt{x_0-1}}$$

$$(x_0, y_0) \quad \text{and} \quad y_0 = \sqrt{x_0 - 1}$$

Equation of the tangent line :
$$y = y_0 + \frac{1}{2\sqrt{x_0-1}} \cdot (x - x_0)$$

The tangent line passes through $(-3, 0)$, so

$$0 = y_0 + \frac{1}{2\sqrt{x_0-1}} (-3-x_0) \quad , \quad \text{substitute } \sqrt{x_0-1} \text{ on } y_0$$

$$\frac{3+x_0}{2\sqrt{x_0-1}} = \sqrt{x_0-1} \Rightarrow 3+x_0 = 2(x_0-1)$$
$$\Rightarrow x_0 = 5 \Rightarrow y_0 = \sqrt{5-1} = 2$$

$$\Rightarrow m_t = \frac{1}{2\sqrt{5-1}} = \frac{1}{4}$$

Hence, the equation of the tangent line

$$y = 2 + \frac{1}{4}(x-5) \Rightarrow y = \frac{1}{4}x + \frac{3}{4}$$

The slope of the normal line: $m_N = -\frac{1}{m_T}$, so $m_N = -4$

and $P(5, 2)$,

The equation of the normal line,

$$y = 2 - 4(x-5) \Rightarrow y = -4x + 22 //$$

3) The slope of the horizontal tangent of the point $x = x_0$ is $m = 0$.

$$f(x) = x^2 + 4x - 4$$

$$f'(x) = 2x + 4$$

$$m = f'(x_0) = 2x_0 + 4$$

$$2x_0 + 4 = 0 \Rightarrow x_0 = -2$$

Hence, the function $f(x)$ has horizontal tangent at $x = -2$ //

$$4) \operatorname{cosec}(x^2+y^2) = 1 \Rightarrow \frac{1}{\sin(x^2+y^2)} = 1 \Rightarrow \sin(x^2+y^2) = 1$$

$$\text{So, } x^2+y^2 = \frac{\pi}{2} + 2k\pi, \quad k \in \mathbb{Z}$$

By using implicit differentiation, we get

$$2x + 2y \cdot y' = 0 \Rightarrow y' = -\frac{x}{y}$$

We may have vertical tangent $y=0$. Then

$$x^2 + 0^2 = \frac{\pi}{2} + 2k\pi$$

$$x = \pm \sqrt{\frac{\pi}{2} + 2k\pi} //$$

$$5) \text{ a. } y = \frac{x^3+7}{x} \Rightarrow y = x^2 + 7x^{-1} \Rightarrow y' = 2x - 7x^{-2}$$

$$\text{b. } y = x^7 + \sqrt{7}x - \frac{1}{\pi+1} \Rightarrow y' = 7x^6 + \sqrt{7}$$

$$\text{c. } y = (2x-5)(4-x)^{-1} \Rightarrow y' = (2x-5)'(4-x)^{-1} + (2x-5)[(4-x)^{-1}]'$$

$$\text{Using product rule } \Rightarrow y' = 2(4-x)^{-1} + (2x-5)(-1)(4-x)^{-2}(-1)$$

$$\Rightarrow y' = \frac{2}{4-x} + \frac{2x-5}{(4-x)^2} = \frac{2(4-x) + 2x-5}{(4-x)^2} = \frac{3}{(4-x)^2}$$

$$\text{Using quotient rule } y = \frac{2x-5}{4-x} \Rightarrow y' = \frac{(2x-5)'(4-x) - (2x-5)(4-x)'}{(4-x)^2}$$

$$y' = \frac{2(4-x) - (2x-5)(-1)}{(4-x)^2} = \frac{3}{(4-x)^2}$$

$$\text{d. } y = \frac{x(x+1)(x^2-x+1)}{x^4} = \frac{x^3-1}{x^3} = 1 - x^{-3}$$

$$\Rightarrow y' = -(-3)x^{-4} \Rightarrow y' = \frac{3}{x^4}$$

e. $y = (x^2+1)(x+5+\frac{1}{x})$

$$y' = (x^2+1)'(x+5+\frac{1}{x}) + (x^2+1)(x+5+\frac{1}{x})'$$

$$= 2x(x+5+\frac{1}{x}) + (x^2+1)(1-\frac{1}{x^2})$$

$$= 2x^2 + 10x + 2 + \frac{x^4-1}{x^2} = 3x^2 + 10x + 2 - x^{-2} //$$

f. $y = (\sec x + \tan x)(\sec x - \tan x) = \sec^2 x - \tan^2 x = 1$, since $1 + \tan^2 x = \sec^2 x$

So, $y = 1 \Rightarrow y' = 0$

OR $y = \sec^2 x - \tan^2 x$

$$y' = 2 \sec x \cdot \underbrace{\sec x \cdot \tan x}_{(\sec x)'} - 2 \tan x \cdot \underbrace{\sec^2 x}_{(\tan x)'} = 0 //$$

g. $y = \tan(x + \cos x)$, $y' = \frac{dy}{dx} = ?$

{ Chain rule or outside-inside rule, $y = f(g(x)) \Rightarrow y' = f'(g(x)) \cdot g'(x)$ }

Let $u = x + \cos x$, then $y = \tan u$

$u = x + \cos x$

By using chain rule,

$$\frac{dy}{dx} = \frac{dy}{du} \cdot \frac{du}{dx} = \sec^2 u \cdot (1 - \sin x)$$

$$\Rightarrow \frac{dy}{dx} = \sec^2(x + \cos x) (1 - \sin x)$$

h) $y = \tan^2(\sin^3 x)$, $\frac{dy}{dx} = ?$

Let $y = u^2$

$u = \tan(v)$

$v = w^3$

$w = \sin x$

$$\frac{dy}{dx} = \frac{dy}{du} \cdot \frac{du}{dv} \cdot \frac{dv}{dw} \cdot \frac{dw}{dx}$$

$$= 2u \cdot \sec^2(v) \cdot 3w^2 \cdot \cos x$$

$$= 2 \tan(\sin^3 x) \cdot \sec^2(\sin^3 x) \cdot 3 \sin^2 x \cdot \cos x //$$

$$i) y = \sec \sqrt{x} \cdot \tan \frac{1}{x}$$

$$y' = (\sec \sqrt{x})' \cdot \tan \frac{1}{x} + \sec \sqrt{x} \cdot \left(\tan \frac{1}{x}\right)'$$

$$= \sec \sqrt{x} \cdot \tan \sqrt{x} \cdot \frac{1}{2\sqrt{x}} \cdot \tan \frac{1}{x} + \sec \sqrt{x} \cdot \sec^2 \frac{1}{x} \cdot \frac{-1}{x^2}$$

$$6) y = \cot \left(\frac{\sin x}{x} \right)$$

$$y' = -\csc^2 \left(\frac{\sin x}{x} \right) \cdot \left(\frac{\sin x}{x} \right)' = -\csc^2 \left(\frac{\sin x}{x} \right) \cdot \frac{(\cos x)x - \sin x}{x^2}$$

↑ quotient rule

$$b) y = \left(\frac{\sin x}{1 + \cos x} \right)^2$$

$$y' = 2 \cdot \left(\frac{\sin x}{1 + \cos x} \right) \cdot \left(\frac{\sin x}{1 + \cos x} \right)'$$

$$= 2 \cdot \left(\frac{\sin x}{1 + \cos x} \right) \cdot \frac{\cos x(1 + \cos x) - \sin x(-\sin x)}{(1 + \cos x)^2} = \frac{2 \sin x}{(1 + \cos x)^2}$$

$$c) y = x^{-3} \sec^2(2x)$$

$$y' = -3 \cdot (x^{-4}) \cdot \sec^2(2x) + x^{-3} \cdot 2 \sec(2x) \cdot \frac{(\sec 2x)(\tan 2x) \cdot 2}{(\sec 2x)'} = -3x^{-4} \sec^2(2x) + 2x^{-3} \sec(2x) \tan(2x)$$

$$d) y = \frac{\tan x}{1 + \tan x} \Rightarrow y' = \frac{\sec^2 x (1 + \tan x) - (\tan x)(\sec^2 x)}{(1 + \tan x)^2} = \frac{\sec^2 x}{(1 + \tan x)^2}$$

$$e) y = \left(-1 - \frac{\csc \theta}{2} - \frac{\theta^2}{4} \right)^2$$

$$y' = 2 \left(-1 - \frac{\csc \theta}{2} - \frac{\theta^2}{4} \right) \left(\frac{-\csc \theta \cot \theta}{2} - \frac{\theta}{2} \right)$$

$$f) y' = 4(1-x)^3(-1)(1 + \sin^2 x)^{-5} + (1-x)^4 \cdot -5(1 + \sin^2 x)^{-6} \cdot 2 \sin x \cdot \cos x$$

$$7) y' = 6x^2 - 6x - 12$$

a) perpendicular to the line $y = 1 - \frac{x}{24}$, slope = $-\frac{1}{24}$

the slope of tangent line $m_T = 24$ since orthogonality

$$6x^2 - 6x - 12 = 24 \Rightarrow x^2 - x - 6 = 0$$

$$(x-3)(x+2) = 0 \quad x=3 \text{ or } x=-2$$

b) parallel to the line $y = \sqrt{2} - 12x$, slope = -12

the slope of tangent line $m_T = -12$

$$6x^2 - 6x - 12 = -12 \Rightarrow x^2 - x = 0 \Rightarrow x(x-1) = 0 \quad x=0, \\ \text{or } x=1$$

Q: Use implicit differentiation to find $\frac{dy}{dx}$.

a) $2xy + y^2 = x + y$

b) $y^2 \cdot \cos\left(\frac{1}{y}\right) = 2x + 2y$

Solution a) $2xy + y^2 = x + y$, We cannot solve the equation for y as an explicit function of x ,

So, we must use implicit differentiation.

$$\frac{d}{dx}(2xy) + \frac{d}{dx}(y^2) = \frac{d}{dx}(x) + \frac{d}{dx}(y)$$

$$2 \cdot 1 \cdot y + 2x \cdot \frac{dy}{dx} + 2 \cdot y \cdot \frac{dy}{dx} = 1 + \frac{dy}{dx}$$

$$2y + 2x \cdot y' + 2y \cdot y' = 1 + y'$$

$$y'(2x + 2y - 1) = 1 - 2y$$

$$y' = \frac{1 - 2y}{2x + 2y - 1} //$$

b) $\frac{d}{dx}\left(y^2 \cdot \cos\left(\frac{1}{y}\right)\right) = \frac{d}{dx}(2x + 2y)$

$$\frac{d}{dx}(y^2) \cdot \cos\left(\frac{1}{y}\right) + y^2 \cdot \frac{d}{dx}\left(\cos\left(\frac{1}{y}\right)\right) = 2 + 2 \cdot \frac{dy}{dx}$$

$$2 \cdot y \cdot \frac{dy}{dx} \cdot \cos\left(\frac{1}{y}\right) + y^2 \cdot \left[-\sin\left(\frac{1}{y}\right) \cdot \frac{-1}{y^2} \cdot \frac{dy}{dx}\right] = 2 + 2 \cdot \frac{dy}{dx}$$

$$2y \cdot y' \cdot \cos\left(\frac{1}{y}\right) + y^2 \cdot \sin\left(\frac{1}{y}\right) \cdot \frac{1}{y^2} \cdot y' - 2y' = 2$$

$$y' = \frac{2}{2y \cdot \cos\left(\frac{1}{y}\right) + y^2 \cdot \sin\left(\frac{1}{y}\right) \cdot \frac{1}{y^2} - 2}$$

Q: Find the value of $\frac{d^2y}{dx^2}$ for the following function

$$xy + y^2 = 1 \quad \text{at the point } (0, -1).$$

Solution:

$$\frac{d}{dx}(xy + y^2) = \frac{d}{dx}(1)$$

$$1 \cdot y + x \cdot y' + 2yy' = 0 \quad \Rightarrow \quad y' = \frac{-y}{x+2y}$$

Take second derivative,

$$y' + 1 \cdot y' + x \cdot y'' + 2y' \cdot y' + 2y \cdot y'' = 0$$

$$y''(x+2y) = -2y' - 2(y')^2$$

$$y'' = \frac{-2y' - 2(y')^2}{x+2y}$$

$$y'' = \frac{-2\left(\frac{-y}{x+2y}\right) - 2\left(\frac{-y}{x+2y}\right)^2}{x+2y}$$

$$\frac{d^2y}{dx^2} \Big|_{(x,y)=(0,-1)} = \frac{-2\left(\frac{-1}{-2}\right) - 2\left(\frac{-1}{-2}\right)^2}{-2}$$

$$= \frac{+1 - \frac{1}{2}}{-2} = -\frac{1}{4} //$$

Q: Find all the points on the curve which have ~~the~~ slope -1

$$x^2 y^2 + xy = 2$$

Solution: We need to find the points (x_0, y_0) such that $y' \Big|_{(x_0, y_0)} = -1$

To find y' , we'll use implicit differentiation, because we cannot solve the equation for y as an explicit function of x

$$\frac{d}{dx}(x^2 y^2) + \frac{d}{dx}(xy) = \frac{d}{dx}(2)$$

$$2x \cdot y^2 + x^2 \cdot 2 \cdot y \cdot y' + 1 \cdot y + x y' = 0$$

$$2x_0 y_0^2 + x_0^2 \cdot 2 y_0 \cdot (-1) + y_0 + x_0 (-1) = 0$$

$$2x_0 y_0^2 - 2x_0^2 y_0 + y_0 - x_0 = 0$$

$$2x_0 y_0 (y_0 - x_0) + (y_0 - x_0) = 0$$

$$(2x_0 y_0 + 1)(y_0 - x_0) = 0 \Rightarrow y_0 = x_0 \quad \text{or} \quad x_0 y_0 = -\frac{1}{2}$$

• For $x_0 = y_0$, $x_0^2 x_0^2 + x_0 x_0 = 2$

$$x_0^4 + x_0^2 - 2 = 0$$

$$(x_0^2 + 2)(x_0^2 - 1) = 0 \Rightarrow x_0^2 = 1 \quad \begin{array}{l} x_0 = 1 \\ x_0 = -1 \end{array}$$

Thus, $(1, 1)$ or $(-1, -1)$ $x_0^2 \neq -2$

• For $x_0 y_0 = -\frac{1}{2}$, $(-\frac{1}{2})^2 - \frac{1}{2} \neq 2$

Q: Find an equation for the tangent line to each of the following parametrized curves at the given value. Also find the value of $\frac{d^2y}{dx^2}$ at the given point.

a) $x = \sec^2 t - 1$, $y = \tan t$, $t = -\frac{\pi}{4}$

b) $x = -\sqrt{t+1}$, $y = \sqrt{3t}$, $t = 3$

Solution: a) $\frac{dy}{dx} = \frac{dy/dt}{dx/dt} = \frac{\sec^2 t}{2 \sec t \cdot \sec t \cdot \tan t} = \frac{1}{2 \tan t}$

$$\left. \frac{dy}{dx} \right|_{t = -\frac{\pi}{4}} = \frac{1}{2 \tan(-\frac{\pi}{4})} = -\frac{1}{2} \quad \text{'' (slope of tangent line)}$$

if $t = -\frac{\pi}{4}$, then $x = \sec^2(-\frac{\pi}{4}) - 1 = \frac{1}{\cos^2(-\frac{\pi}{4})} - 1 = 1$

$$y = \tan(-\frac{\pi}{4}) = -1$$

$$m = -\frac{1}{2} \quad (x_0, y_0) = (1, -1)$$

The equation of tangent line is that $y = -1 + (-\frac{1}{2})(x-1)$

$$2y = -1 - x \quad \text{''}$$

$$\frac{d^2y}{dx^2} = \frac{dy'/dt}{dx/dt} = \frac{[(2 \tan t)^{-1}]'}{2 \sec^2 t \cdot \tan t} = \frac{-1(2 \tan t)^{-2} \cdot 2 \sec^2 t}{2 \sec^2 t \cdot \tan t}$$

$$= -\frac{1}{4 \tan^3 t}$$

$$\left. \frac{d^2y}{dx^2} \right|_{t = -\frac{\pi}{4}} = \frac{1}{4} \quad \text{''}$$

$$b) \quad \frac{dy}{dx} = \frac{dy/dt}{dx/dt} = \frac{\frac{1}{2\sqrt{3t}} \cdot 3}{-\frac{1}{2\sqrt{t+1}}} = \frac{-3\sqrt{t+1}}{\sqrt{3t}} = -3\sqrt{\frac{t+1}{3t}}$$

$$\left. \frac{dy}{dx} \right|_{t=3} = \frac{-3 \cdot 2}{3} = -2 //$$

when $t=3$, $x = -\sqrt{3+1} = -2$ $(-2, 3)$
 $y = \sqrt{3 \cdot 3} = 3$

The equ. of tangent line: $y = 3 + (-2)(x + 2)$
 $y = -1 - 2x //$

$$\frac{d^2y}{dx^2} = \frac{dy'/dt}{dx/dt} = \frac{\left[-3 \cdot \left(\frac{t+1}{3t} \right)^{1/2} \right]'}{-\frac{1}{2\sqrt{t+1}}} = 6\sqrt{t+1} \cdot \left[\left(\frac{t+1}{3t} \right)^{1/2} \right]'$$

$$= 6\sqrt{t+1} \cdot \frac{1}{2} \cdot \frac{1}{\sqrt{\frac{t+1}{3t}}} \cdot \frac{3t - (t+1)3}{9t^2}$$

$$= 6 \cdot \frac{1}{2} \cdot 3 \cdot \frac{1}{3} \cdot \sqrt{t+1} \cdot \frac{\sqrt{3t}}{\sqrt{t+1}} \cdot \frac{-1}{t^2}$$

$$= -\frac{\sqrt{3t}}{t^2}$$

$$\left. \frac{d^2y}{dx^2} \right|_{t=3} = -\frac{3}{9} = -1/3 //$$

Q: Assuming that the following equations define x and y implicitly as differentiable functions $x = f(t)$ and $y = g(t)$.

$$x \sin t + \sqrt{x} = t, \quad t \sin t - 2t = y, \quad t = \pi$$

Find the slope of the curve $x = f(t)$, $y = g(t)$ at the given value of t , and write the tangent line at $t = \pi$

Solution: We'll calculate the value of $\frac{dy}{dx} \Big|_{t=\pi}$

$$\text{Slope: } \frac{dy}{dx} \Big|_{t=\pi} = \frac{dy/dt}{dx/dt} \Big|_{t=\pi}$$

$$\frac{dy}{dt} \Big|_{t=\pi} = (\sin t + t \cos t - 2) \Big|_{t=\pi} = \sin \pi + \pi \cdot \cos \pi - 2 = -\pi - 2$$

$$\frac{dx}{dt} \Big|_{t=\pi} = ? \quad \frac{d}{dt} (x \cdot \sin t) + \frac{d}{dt} (\sqrt{x}) = \frac{d}{dt} (t)$$

$$\frac{dx}{dt} \cdot \sin t + x \cdot \underbrace{\frac{d}{dt} (\sin t)}_{\cos t} + \frac{1}{2\sqrt{x}} \cdot \frac{dx}{dt} = 1$$

$$\frac{dx}{dt} = \frac{1 - x \cdot \cos t}{\sin t + \frac{1}{2\sqrt{x}}}$$

when $t = \pi$: $x \cdot \sin \pi + \sqrt{x} = \pi \Rightarrow x = \pi^2$

$\pi \cdot \sin \pi - 2\pi = y \Rightarrow y = -2\pi$

$$\frac{dx}{dt} \Big|_{t=\pi} = \frac{1 - \pi^2 \cdot \cos \pi}{\sin \pi + \frac{1}{2\sqrt{\pi^2}}} = \frac{1 - \pi^2}{\frac{1}{2\pi}} = 2\pi - 2\pi^3$$

$$\frac{dy}{dx} \Big|_{t=\pi} = \frac{-\pi - 2}{2\pi - 2\pi^3}$$

Tangent line:

$$y = -2\pi + \left(\frac{-\pi - 2}{2\pi - 2\pi^3} \right) (x - \pi^2)$$

Q: Find the $\frac{dy}{dx}$ for the following functions

a) $y = \tan(x + \cos x)$

b) $y = \tan^2(\sin^3 x)$

c) $y = \cos\left(5 \sin \frac{x}{3}\right)$

chain rule
outside-inside rule

$$y = f(g(x))$$

$$y' = f'(g(x)) \cdot g'(x)$$

Solution:

a) $y = \tan u$

$u = x + \cos x$

$$\frac{dy}{dx} = \frac{dy}{du} \cdot \frac{du}{dx} = \sec^2 u \cdot (1 - \sin x)$$

$$= \sec^2(x + \cos x) \cdot (1 - \sin x)$$

b) $y = u^2$

$u = \tan v$

$v = t^3$

$t = \sin x$

$$\frac{dy}{dx} = \frac{dy}{du} \cdot \frac{du}{dv} \cdot \frac{dv}{dt} \cdot \frac{dt}{dx}$$

$$= 2u \cdot \sec^2 v \cdot 3t^2 \cdot \cos x$$

$$= 2 \cdot \tan(\sin^3 x) \cdot \sec^2(\sin^3 x) \cdot 3 \cdot \sin^2 x \cdot \cos x$$

$$y' = 2 \tan(\sin^3 x) \cdot [\tan(\sin^3 x)]'$$

$$= 2 \tan(\sin^3 x) \cdot \sec^2(\sin^3 x) \cdot (\sin^3 x)'$$

$$= 2 \tan(\sin^3 x) \cdot \sec^2(\sin^3 x) \cdot 3 \sin^2 x \cdot \cos x$$

c) $y = \cos u$

$u = 5 \sin v$

$v = \frac{x}{3}$

$$\frac{dy}{dx} = \frac{dy}{du} \cdot \frac{du}{dv} \cdot \frac{dv}{dx}$$

$$= -\sin u \cdot 5 \cos v \cdot \frac{1}{3}$$

$$= -\sin\left(5 \sin \frac{x}{3}\right) \cdot 5 \cos \frac{x}{3} \cdot \frac{1}{3}$$

Q: Find $\frac{d^2y}{dx^2}$ for the following implicit function $y^2 = 1 - \frac{2}{x}$

~~6) Evaluate $\frac{dy}{dx}$ for other points~~

Solution: $\frac{d}{dx}(y^2) = \frac{d}{dx}\left(1 - 2 \cdot x^{-1}\right)$

$$2 \cdot y \cdot y' = (-2)(-1)x^{-2}$$

$$2y \cdot y' = 2x^{-2} \Rightarrow y' = \frac{1}{x^2 \cdot y}$$

Take second derivative.

$$\frac{d}{dx}(2y \cdot y') = \frac{d}{dx}(2x^{-2})$$

$$\frac{d}{dx}(2y) \cdot y' + 2y \cdot \frac{d}{dx}(y') = 2(-2)x^{-3}$$

$$2y' \cdot y' + 2y \cdot y'' = -4x^{-3}$$

$$y'' = \frac{-4x^{-3} - 2(y')^2}{2y}$$

$$y'' = \frac{-4x^{-3} - 2(x^{-2} \cdot y^{-1})^2}{2y} = \frac{-4x^{-3} - 2x^{-4}y^{-2}}{2y}$$

$$= -\frac{2xy^2 + 1}{x^4y^3} //$$

$$\# \quad |\sin b - \sin a| \leq |b - a|$$

Solution:

Let $a, b \in \mathbb{R}$ be given arbitrarily with $a < b$.

Consider the function $f(x) = \sin x$ which is continuous and differentiable everywhere.

- $f(x) = \sin x$ is continuous on $[a, b]$
- $f(x) = \sin x$ is differentiable on (a, b)

By the Mean Value Theorem,

There exists at least one $c \in (a, b)$ s.t. $f'(c) = \frac{f(b) - f(a)}{b - a}$

$$\text{Then } |f'(c)| = \frac{|f(b) - f(a)|}{|b - a|}$$

Since $f'(x) = \cos x$, $f'(c) = \cos c$ and so $0 \leq |f'(c)| \leq 1$

Therefore, $\frac{|f(b) - f(a)|}{|b - a|} \leq 1$. That is

$$|\sin b - \sin a| \leq |b - a| \quad \square$$

\square

Prove that the functions $f(x) = \frac{x}{x^4+1}$ and $g(x) = \frac{x}{x^3+1}$ satisfy the equation $f'(x) = g'(x)$ at least one x in the interval $(0,1)$.

solution: Let $H(x) = f(x) - g(x)$.

$$H(x) = \frac{x}{x^4+1} - \frac{x}{x^3+1} = \frac{(1-x)x^4}{(1+x^4)(1+x^3)}$$

$$H'(x) = f'(x) - g'(x)$$

Also, $H(0) = f(0) - g(0) = 0$ and

$$H(1) = f(1) - g(1) = 0$$

The function $H(x)$ satisfies the hypotheses of Rolle's Theorem on $[0,1]$. It is continuous on $[0,1]$ and differentiable on $(0,1)$ since both $f(x)$ and $g(x)$ are.

Therefore, $H'(c) = 0$ at some point $c \in (0,1)$

$$H'(c) = f'(c) - g'(c) \Rightarrow f'(c) = g'(c).$$

Rolle Theorem

- $f(x)$ is continuous on the closed interval $[a,b]$
- $f(x)$ is differentiable on the open interval (a,b)
- $f(a) = f(b)$

$\Rightarrow \exists c \in (a,b)$ such that $f'(c) = 0$ //

Intermediate Value Theorem

- $f(x)$ is continuous on the closed interval $[a,b]$
 - M is any number between $f(a)$ and $f(b)$
- $\Rightarrow \exists c \in (a,b)$ s.t. $f(c) = M$

Show that $2x^3 + x + 4 = 0$ has exactly one zero.

solution: Define $f(x) = 2x^3 + x + 4$.

$$(i) \quad f(-2) = 2(-2)^3 - 2 + 4 = -14 < 0$$

$$f(0) = 4 > 0$$

By Intermediate Value Theorem, we get that $f(x)$ which is a continuous func. has at least one zero between -2 and 0 .

(ii) Suppose that $f(x)$ has more than one zero. Let these zeros be $x = a$ and $x = b$, $a < b$.

Apply Rolle Theorem on the interval $[a, b]$.

- $f(x)$ is continuous

- $f(x)$ is differentiable, because

$$f'(x) = 6x^2 + 1, \quad \forall x \in (-\infty, \infty)$$

- $f(a) = f(b) = 0$

Therefore, by Rolle Theorem, $\exists c \in (a, b) : f'(c) = 0$.

but $f'(x) = 6x^2 + 1 > 0$ for $x \in (-\infty, \infty)$. ($f(x) \nearrow$)

f can have at most one zero on \mathbb{R} .

(i) \wedge (ii) $\Rightarrow f$ has exactly one zero on \mathbb{R} .

Does the function $f(x) = \sqrt{x-x^2}$ satisfy the hypothesis of Mean Value Theorem on the interval $[0,1]$?

If so, find the admissible value of c .

Solution:

Recall: Mean Value Theorem

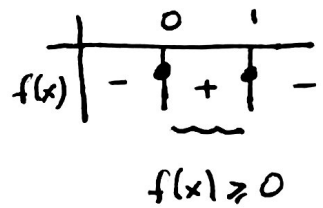
- $f(x)$ is continuous on the closed interval $[a,b]$
- $f(x)$ is differentiable on the open interval (a,b)

\Rightarrow There is a number c such that $a < c < b$ and

$$f'(c) = \frac{f(b) - f(a)}{b - a}$$

• Continuity:

$$\cdot f(x) = \sqrt{x-x^2} \quad x-x^2 \geq 0 \Rightarrow x(1-x) \geq 0$$



Domain of f : $[0,1]$

So, $f(x)$ is continuous on $[0,1]$.

• Differentiability:

$$f'(x) = \frac{1}{2\sqrt{x-x^2}} \cdot (1-2x) = \frac{1-2x}{2\sqrt{x-x^2}}$$

$f'(x)$ is defined on $(0,1)$. Hence f is differentiable on (a,b) .

Therefore, MVT's hypothesis are satisfied.

From MVT, we can say that

$$\exists c \in (0,1) \text{ such that } f'(c) = \frac{f(1) - f(0)}{1 - 0} = 0$$

$$f'(c) = \frac{1-2c}{2\sqrt{c-c^2}} = 0 \Rightarrow c = 1/2 \quad \square$$

Q: Sketch the graph of $f(x) = \frac{x^3}{x^2-9}$

Solution:

① Domain: $x^2-9=0$ $x=3$ $x=-3$. So $D_f: \mathbb{R} - \{-3, 3\}$

② Intercepts: $x=0 \Rightarrow y=0$ $(0,0)$
 $y=0 \Rightarrow x=0$

③ Symmetry: $f(-x) = \frac{-x^3}{x^2-9} = -f(x)$, f is odd

So, its graph is symmetric about the origin.

④ Asymptotes:

Horizontal Asymptote:

$$\lim_{x \rightarrow \infty} \frac{x^3}{x^2-9} = \lim_{x \rightarrow \infty} \frac{x^2 \cdot x}{x^2(1-9/x^2)} = \infty$$

} There is no horizontal asymptote.

$$\lim_{x \rightarrow -\infty} \frac{x^3}{x^2-9} = -\infty$$

Vertical Asymptote: f is undefined at $x=3$ and $x=-3$

$$\lim_{x \rightarrow 3^+} \frac{x^3}{x^2-9} = \frac{27}{0^+} = +\infty$$

$$\lim_{x \rightarrow -3^+} \frac{x^3}{x^2-9} = \frac{-27}{0^-} = +\infty$$

$$\lim_{x \rightarrow 3^-} \frac{x^3}{x^2-9} = \frac{27}{0^-} = -\infty$$

$$\lim_{x \rightarrow -3^-} \frac{x^3}{x^2-9} = \frac{-27}{0^+} = -\infty$$

$x=3$ is vertical asymptote

$x=-3$ is vertical asymptote.

Oblique Asymptote: Let $y=mx+n$ be oblique asymptote of $f(x)$.

$$m = \lim_{x \rightarrow \infty} \frac{f(x)}{x} = \lim_{x \rightarrow \infty} \frac{x^3}{x^3-9x} = 1$$

$$n = \lim_{x \rightarrow \infty} [f(x) - mx] = \lim_{x \rightarrow \infty} \left[\frac{x^3}{x^2-9} - x \right] = \lim_{x \rightarrow \infty} \frac{3x}{x^2-9} = 0$$

} So, $y=x$ is an oblique asymptote.

⑤ Extremum Points, Increasing and Decreasing

$$f'(x) = \frac{3x^2(x^2-9) - x^3 \cdot 2x}{(x^2-9)^2} = \frac{x^2(x^2-27)}{(x^2-9)^2}$$

• $f'(x) = 0$ when $x=0$, $x=3\sqrt{3}$ and $x=-3\sqrt{3} \in D_f$
 These are critical points.

$$f(0) = 0 \quad f(3\sqrt{3}) = \frac{81\sqrt{3}}{18} = \frac{9\sqrt{3}}{2} \quad f(-3\sqrt{3}) = -\frac{9\sqrt{3}}{2}$$

• f' undefined at $x=3$, $x=-3 \notin D_f$

	$-\infty$	$-3\sqrt{3}$	-3	0	3	$3\sqrt{3}$	∞
$f'(x)$	+	0	-	0	-	0	+
$f(x)$	↗		↘		↘		↗

f' changes sign at $x = -3\sqrt{3}, 3\sqrt{3}$
 \Rightarrow there is local max/min.

f is increasing on $(-\infty, -3\sqrt{3}] \cup [3\sqrt{3}, \infty)$

f is decreasing on $[-3\sqrt{3}, 3\sqrt{3}] - \{-3, 3\}$

f has local maximum at $-3\sqrt{3}$.

f has local minimum at $3\sqrt{3}$.

Since f' does not change sign at 0 , so there is no local maximum or minimum.

⑥ Concavity, Inflection points

$$f''(x) = \frac{18x(x^2 + 27)}{(x^2 - 9)^3}$$

$f''(x) = 0$ when $x = 0$

$f''(x)$ undefined at $x = 3, -3 \notin D_f$

	-3	0	3	
f''	-	+	-	+
$f(x)$	∩	∪	∩	∪

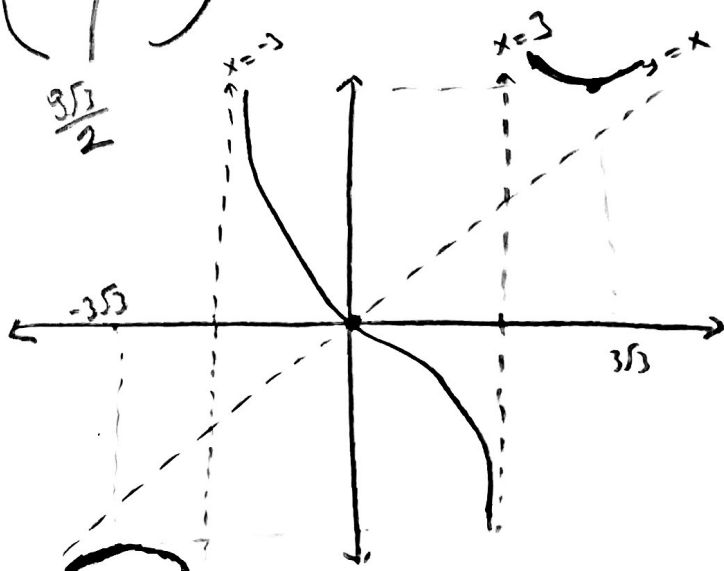
f has an inflection point at 0 because f'' change sign at 0.

⑦ Table & Graph.

	$-3\sqrt{3}$	-3	0	3	$3\sqrt{3}$	
f'	↗	↘	↘	↘	↘	↗
f''	∩	∩	∪	∩	∪	∪
	$-\frac{3\sqrt{3}}{2}$	-9	0	-9	$\frac{3\sqrt{3}}{2}$	

$x = 3, -3$ vertical

$y = x$ oblique



Soru: $f(x) = \frac{x^3 - 4x}{x^2 - 1}$ fonksiyonun grafiğini çiziniz.

① Tanım Aralığı:

$x = \pm 1$ 'de $f(x)$ tanımsızdır. T.A: $(-\infty, -1) \cup (-1, 1) \cup (1, \infty)$

② Ekselleri Kesen Noktaları:

$$x = 0 \Rightarrow y = f(0) = \frac{0 - 0}{0 - 1} = 0 \Rightarrow (0, 0)$$

$$y = 0 \Rightarrow 0 = \frac{x^3 - 4x}{x^2 - 1} \Rightarrow x(x^2 - 4) = 0 \Rightarrow \left. \begin{array}{l} x = 0 \\ x = \pm 2 \end{array} \right\} \Rightarrow \begin{array}{l} (0, 0) \\ (2, 0) \\ (-2, 0) \end{array}$$

③ Simetri:

$$f(-x) = \frac{(-x)^3 - 4(-x)}{(-x)^2 - 1} = -\frac{x^3 - 4x}{x^2 - 1} = -f(x)$$

$\Rightarrow f(x)$ tek fonksiyondur. $f(x)$ 'in grafiği orijine göre simetriktir.

④ Asimptotlar

Yatay asimptot:

$$\lim_{x \rightarrow \infty} \frac{x^3 - 4x}{x^2 - 1} = \lim_{x \rightarrow \infty} \frac{x^2(x - 4/x)}{x^2(1 - 1/x^2)} = +\infty \left. \vphantom{\lim_{x \rightarrow \infty}} \right\} \text{ Yatay Asimptot yoktur.}$$

$$\lim_{x \rightarrow -\infty} \frac{x^3 - 4x}{x^2 - 1} = -\infty$$

Düsey Asimptot:

$$\lim_{x \rightarrow 1^+} \frac{x^3 - 4x}{x^2 - 1} = \frac{-3}{0^+} = -\infty$$

$$\lim_{x \rightarrow -1^+} \frac{x^3 - 4x}{x^2 - 1} = \frac{3}{0^-} = -\infty$$

$$\lim_{x \rightarrow 1^-} \frac{x^3 - 4x}{x^2 - 1} = \frac{-3}{0^-} = +\infty$$

$$\lim_{x \rightarrow -1^-} \frac{x^3 - 4x}{x^2 - 1} = \frac{3}{0^+} = +\infty$$

$\Rightarrow x = 1$ düsey asimptot.

$\Rightarrow x = -1$ düsey asimptot.

Eğik asimptot:

$$\begin{array}{r} x^3 - 4x \quad | \quad x^2 - 1 \\ - x^3 - x \\ \hline -3x \end{array} \Rightarrow f(x) = \frac{x^3 - 4x}{x^2 - 1} = \boxed{x} + \frac{-3x}{x^2 - 1}$$

$\Rightarrow y = x$ eğik asimptottur.

⑤ Ekstremin Noktaları, Artanlık ve Azalanlık

$$f'(x) = \frac{(3x^2 - 4)(x^2 - 1) - (x^3 - 4x)(2x)}{(x^2 - 1)^2} = \frac{x^4 + x^2 + 4}{(x^2 - 1)^2}$$

Her x için $f'(x) > 0$. $x = \pm 1$ için f' tanımsızdır.

Fakat $x = \pm 1 \notin T.A$

Dolayısıyla kritik nokta yok.

x	-1	1
$f'(x)$	+	+
$f(x)$	↗	↗

$\forall x \in T.A, f(x)$ artandır.

⑥ Konkavlık ve Büküm Noktaları

$$f''(x) = \frac{(4x^3 + 2x)(x^2 - 1)^2 - (x^4 + x^2 + 4) \cdot 2 \cdot (x^2 - 1)(2x)}{(x^2 - 1)^4} = \frac{-6x(x^2 + 3)}{(x^2 - 1)^3}$$

$f''(x) = 0 \Rightarrow -6x(x^2 + 3) = 0 \Rightarrow x = 0 \in T.A$ Aday büküm noktası

$f''(x)$ tanımsız olduğu noktalar: $x = \pm 1 \notin T.A$

x	-1	0	1
$f''(x)$	+	-	-
$f(x)$	∪	∩	∩

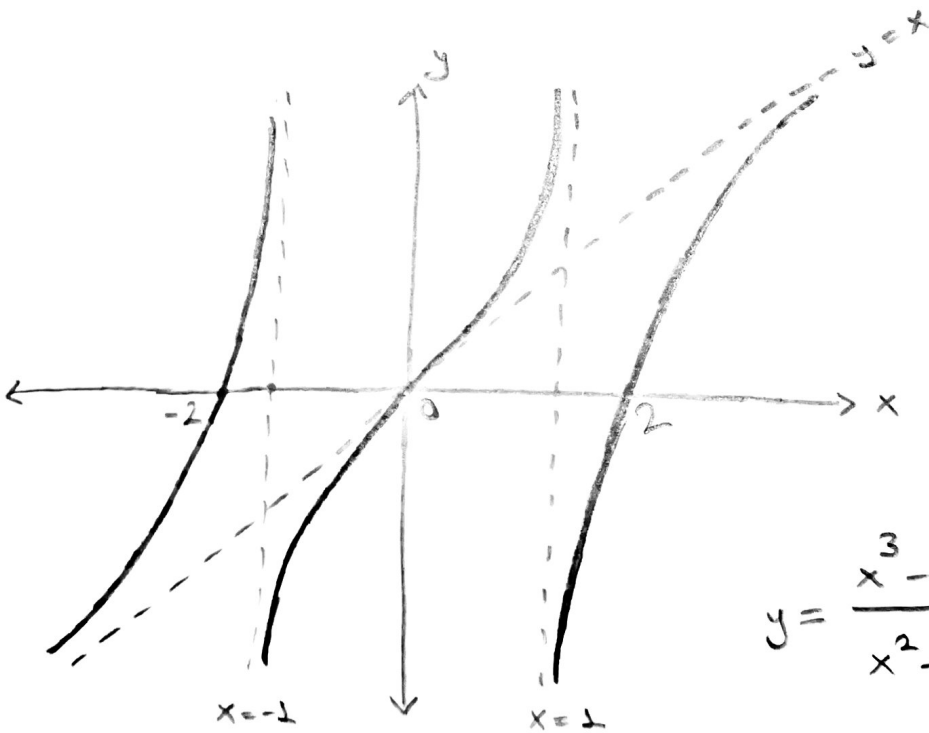
Büküm
Noktası
(0,0)

⑦ Özet Tablo & Grafik

	$-\infty$	-1	0	1	$+\infty$
y'	\nearrow		\nearrow		\nearrow
y''	U	∩	o	U	∩
y	\nearrow		\nearrow		\nearrow
	$+\infty$	$-\infty$	$(0,0)$	$+\infty$	$-\infty$

Bölüm
Açıklaması

Keserler:
 $(0,0)$ $(2,0)$ $(-2,0)$
Eğik Asimptot
 $y=x$



$y = \frac{x^3 - 4x}{x^2 - 1}$ 'in grafiği.

Soru: $f(x) = \frac{(x-1)^2}{x+2}$ fonksiyonun grafiğini çiziniz.

① Tanım Analizi:

$x = -2$ 'de f tanımsızdır. T.A: $(-\infty, -2) \cup (-2, \infty)$

② Eksenleri Kesen Noktolar:

$$x = 0 \Rightarrow y = f(0) = \frac{1}{2} \Rightarrow (0, \frac{1}{2})$$

$$y = 0 \Rightarrow 0 = \frac{(x-1)^2}{x+2} \Rightarrow (x-1)^2 = 0 \quad (1, 0)$$
$$\Rightarrow x = 1$$

③ Simetri:

$$f(-x) = \frac{(-x-1)^2}{-x+2} = \frac{(x+1)^2}{-x+2} \Rightarrow \begin{aligned} f(-x) &\neq f(x) \\ f(-x) &\neq -f(x) \end{aligned}$$

$f(x)$, ne tek ne de çift fonksiyondur. Simetri yoktur.

④ Asimptotlar

Yatay asimptot:

$$\lim_{x \rightarrow \infty} \frac{(x-1)^2}{x+2} = \lim_{x \rightarrow \infty} \frac{x^2 - 2x + 1}{x+2} = \frac{x(x-2+1/x)}{x(1+2/x)} = \infty$$

$$\lim_{x \rightarrow -\infty} \frac{(x-1)^2}{x+2} = -\infty$$

Yatay asimptot yoktur

Düsey asimptot:

$$\lim_{x \rightarrow -2^+} \frac{(x-1)^2}{x+2} = \frac{9}{0^+} = \infty$$

$$\lim_{x \rightarrow -2^-} \frac{(x-1)^2}{x+2} = \frac{9}{0^-} = -\infty$$

$x = -2$ 'de düsey asimptot vardır.

Eğik Asimptot:

$$(x-1)^2 = x^2 - 2x + 1 \Rightarrow \begin{array}{r} x^2 - 2x + 1 \mid x+2 \\ -x^2 + 2x \quad \quad \quad \\ \hline -4x + 1 \quad \quad \quad \\ -4x + 8 \quad \quad \quad \\ \hline 9 \end{array}$$

$$\Rightarrow f(x) = \boxed{x-4} + \frac{9}{x+2}$$

$y = x - 4$ eğik asimptot vardır

⑤ Ekstremin Noktaları, Artanlık ve Azalanlık

$$f'(x) = \frac{2(x-1)(x+2) - (x-1)^2(1)}{(x+2)^2} = \frac{(x-1)(x+5)}{(x+2)^2}$$

$$f'(x) = 0 \Rightarrow x = 1 \in T.A \quad \vee \quad x = -5 \in T.A$$

$$f' \text{ tanımsız} \Rightarrow x = -2 \notin T.A$$

$$\text{Kritik noktalar: } x = 1 \Rightarrow f(1) = 0 \quad (1, 0)$$

$$x = -5 \Rightarrow f(-5) = \frac{36}{-3} = -12 \quad (-5, -12)$$

x	-5	-2	1
f'(x)	+	0	-
f(x)	↗	↘	↗

(-5, -12)
Yerel Maks.
(1, 0)
Yerel Min.

Azalan ^{old.} aralık: $[-5, 1] - \{-2\}$

Artan ^{old.} aralık: $(-\infty, -5) \cup [1, \infty)$

⑥ Konkavlık ve Büküm Noktaları

$$f''(x) = \left[\frac{(x-1)(x+5)}{(x+2)^2} \right]' = \left[\frac{x^2+4x-5}{(x+2)^2} \right]' = \frac{(2x+4)(x+2)^2 - (x^2+4x-5)2(x+2)}{(x+2)^4}$$

$$= \frac{(2x+4)(x+2) - (x^2+4x-5) \cdot 2}{(x+2)^3} = \frac{2x^2+8x+8-2x^2-8x+10}{(x+2)^3} = \frac{18}{(x+2)^3}$$

$$f''(x) = 0 \Rightarrow \forall x \in T.A \quad \frac{18}{(x+2)^3} \neq 0 \Rightarrow \text{A day büküm noktası yoktur.}$$

$$f'' \text{ tanımsız} \Rightarrow x = -2 \in T.A$$

x	-2
f''(x)	-
f(x)	∩

↳ $x = -2$ Büküm noktası değildir.

⑦ Özet Tablo & Grafik

	$-\infty$	-5	-2	1	$+\infty$	
U'	\nearrow	\circ	\searrow	\searrow	\circ	\nearrow
U''	\cap	\cap	\cup	\cup	\cup	\cup
U	\cap	\cap	\cup	\cup	\cup	\cup

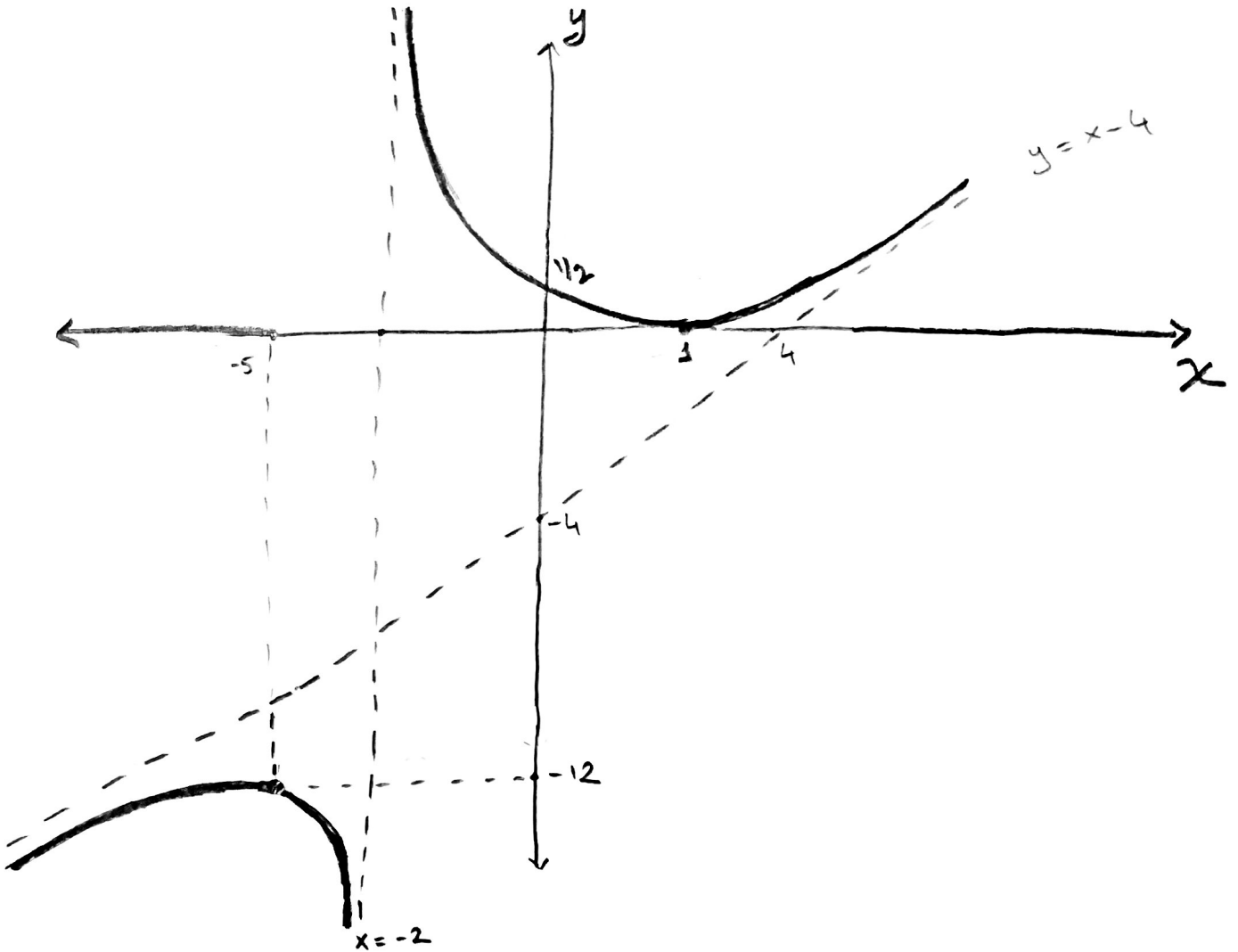
$(-5, -12)$ Yerel Maks.
 $-\infty$ $+\infty$
 $(1, 0)$ Yerel Min

Keseler:

$(0, \frac{1}{2})$ ve $(1, 0)$

Eğik Asimptot:

$$y = x - 4$$



Q. 6

#1)

$$\cos x = 1 - 2 \sin^2 \frac{x}{2}$$

$$\lim_{x \rightarrow 0} \frac{1 - x^2/8 - 1 + 2 \sin^2 \frac{x}{2}}{x^2} = \lim_{x \rightarrow 0} \frac{2 \sin^2 \frac{x}{2} - x^2/8}{x^2}$$

$$= \lim_{x \rightarrow 0} 2 \cdot \left(\frac{\sin \frac{x}{2}}{x} \right)^2 - \lim_{x \rightarrow 0} \frac{x^2/8}{x^2} = 2 \cdot \left(\frac{1}{2} \right)^2 - \frac{1}{8} = \frac{3}{8} //$$

#2) We will check the continuity of given function at $x=2, 4$

• $x=2$

$$i) \lim_{x \rightarrow 2^-} f(x) = \lim_{x \rightarrow 2^-} \tan^{-1} \left(\frac{x}{x-2} \right) = \tan^{-1}(-\infty) = -\frac{\pi}{2}$$

$$ii) \lim_{x \rightarrow 2^+} f(x) = \lim_{x \rightarrow 2^+} \sin^{-1} \left(\frac{2}{x} \right) = \sin^{-1}(1) = \frac{\pi}{2}$$

$$iii) f(2) = \frac{\pi}{2}$$

So, $f(x)$ is discontinuous at $x=2$.

$f(x)$ has a jump discontinuous at $x=2$ since

$$\lim_{x \rightarrow 2^-} f(x) \neq \lim_{x \rightarrow 2^+} f(x).$$

• $x=4$

$$i) \lim_{x \rightarrow 4^-} f(x) = \lim_{x \rightarrow 4^-} \sin^{-1} \left(\frac{2}{x} \right) = \sin^{-1} \left(\frac{2}{4} \right) = \pi/6$$

$$ii) \lim_{x \rightarrow 4^+} f(x) = \lim_{x \rightarrow 4^+} \frac{1}{x-4} = \infty$$

So, $f(x)$ is discontinuous at $x=4$, type: infinite discontinuity

#5) Apply $\frac{d}{dx}$ both of sides,

$$2 \sin^2(x+y) = 3 \sin x + \sin y$$

$$1 - \cos(2(x+y)) = 3 \sin x + \sin y$$

$$\frac{d}{dx} (1 - \cos(2(x+y))) = \frac{d}{dx} (3 \sin x + \sin y)$$

$$\sin(2(x+y)) \cdot 2 \cdot (1+y') = 3 \cos x + \cos y \cdot y' \quad , \quad y' = \frac{dy}{dx}$$

$$\downarrow (x, y) = \left(\frac{\pi}{2}, \frac{\pi}{6}\right) \downarrow$$

$$\sin\left(2\left(\frac{\pi}{2} + \frac{\pi}{6}\right)\right) \cdot 2 \cdot (1+y') = 3 \cos \frac{\pi}{2} + \cos \frac{\pi}{6} \cdot y'$$

$$-\frac{\sqrt{3}}{2} \cdot 2 \cdot (1+y') = 3 \cdot 0 + \frac{\sqrt{3}}{2} \cdot y'$$

$$y' = -\frac{2}{3} \quad \text{or} \quad \frac{dy}{dx} \Big|_{\left(\frac{\pi}{2}, \frac{\pi}{6}\right)} = -\frac{2}{3}$$

$$\rightarrow \frac{d}{dx} (\sin(2(x+y)) \cdot 2(1+y')) = \frac{d}{dx} (3 \cos x + \cos y \cdot y')$$

$$\cos(2(x+y)) \cdot 4(1+y')^2 + \sin(2(x+y)) \cdot 2 \cdot (y'')$$

$$= -3 \sin x - \sin y \cdot (y')^2 + \cos y \cdot y''$$

$$(x, y) = \left(\frac{\pi}{2}, \frac{\pi}{6}\right) \quad \text{and} \quad y' = -\frac{2}{3}$$

$$\Rightarrow \cos\left(\frac{4\pi}{3}\right) \cdot 4 \left(1 - \frac{2}{3}\right)^2 + \sin\left(\frac{4\pi}{3}\right) \cdot 2 \cdot y'' = -3 \sin \frac{\pi}{2} - \sin \frac{\pi}{6} \cdot \left(-\frac{2}{3}\right)^2 + \cos \frac{\pi}{6} \cdot y''$$

$$\Rightarrow -\frac{1}{2} \cdot 4 \cdot \frac{1}{9} + \left(-\frac{\sqrt{3}}{2}\right) \cdot 2 \cdot y'' = -3 - \frac{1}{2} \cdot \frac{4}{9} + \frac{\sqrt{3}}{2} \cdot y''$$

$$\left(\frac{\sqrt{3}}{2} + \sqrt{3}\right) y'' = +3 \Rightarrow \frac{3\sqrt{3}}{2} \cdot y'' = 3$$

$$\Rightarrow y'' = \frac{2}{\sqrt{3}} //$$